

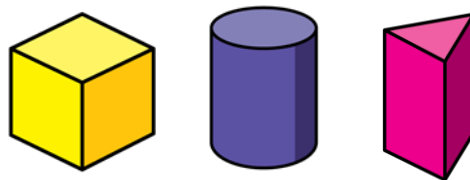


1) Which shape is in the wrong group?

Has curved surfaces



Has no curved surfaces



What time is it?

2) Which shape comes next in the pattern?



3) Divide 30 by 10

4) Find the difference between 25 and 17